



Dear Parents,

We are in the midst of a global pandemic. Schools are prominent social institutions and if we have to make certain changes in the educational process during these times we will do so.

So let's shift gear from the school being the hub of learning to school home learning.

We at M.S. School is taking an initiative in this regard and will be sharing worksheets, certain activities to be done and their observations being recorded and some reading comprehension.

We shall also be sharing certain links for the students to follow.

The students may use the notebooks that were being used in the previous session to write down the answers.

So parents, let's collaborate and utilise this time to continue with the process of learning.

સુજ્ઞ વાલીશ્રી,

આજે આપણે એક વૈશ્વિક મહામારીમાંથી પસાર થઈ રહ્યા છીએ. શાળાઓ એક મુખ્ય સામાજિક સંસ્થા છે અને આ સમયમાં આપણે આપણી શૈક્ષણિક પ્રણાલીમાં પરિવર્તન લાવવાનું હોય તો આપણે તે ચોક્કસપણે કરીશું.

તો આપણે સૌ સાથે મળીને આપણી આ કેન્દ્રબિંદુ સમાન શાળાનો ઘર સુધીનો અભ્યાસ શરૂ કરીએ.

M.S.સ્કુલે આ પરિસ્થિતિમાં ઘરેથી અભ્યાસ કરાવવાની પહેલ શરૂ કરી છે અને તેમાં પ્રયત્નશીલ થઈને વર્કશીટ, વાંચન, ચોક્કસ પ્રવૃત્તિઓ કરાવશે અને તેનું નિરીક્ષણ પણ નોંધવામાં આવશે. આપણે બધા માટે કેટલીક ચોક્કસ Links પણ વિદ્યાર્થીઓને અનુસરવા આપીશું.

જવાબ લખવા માટે વિદ્યાર્થીઓ અગાઉના સત્રમાં વપરાયેલી નોટબુક્સનો ઉપયોગ કરી શકશે.

તો વાલીશ્રીઓ, આ સર્જનાત્મક પ્રવૃત્તિમાં ચાલો આપણે સૌ સહયોગ કરીએ અને આ સમયમાં અભ્યાસની પ્રવૃત્તિ સતત ચાલતી રહે તે માટે સહયોગી બનીએ.

**Q - 1. Tick the correct option.**

- People of Rimdim went to other places because of [a]. flood [b]. disease [c]. drought [d]. cactus
- The cactus had _____ stored in its stems. [a]. food [b]. fertilizer [c]. water [d]. flower
- What happened one morning when adult sat down to stitch ?
[a]. It rained [b]. clouds entered to shop [c]. Abdul slept [d]. it became hot
- Why was the doctor happy with the shirt ?
[a]. It was the best for his dog. [b]. It was the best for his camel
[c]. It fitted the doctor. [d]. It was the best for his giraffe
- Why could the courtiers not spend any gold coin ?
[a]. They did not like anything in the market. [b]. They were poor.
[c]. They could not see the king's face. [d]. They were afraid of the king.
- Why is junk food bad for health ?
[a]. It does not contain roughage. [b]. It is not tasty.
[c]. It is difficult to digest. [d]. It contains proteins.
- Which of the following gives energy ? [a]. Vitamins [b]. Proteins [c]. Carbohydrates [d]. all of three
- _____ contains roughage. [a]. Soft drinks [b]. Fruits [c]. Burgers [d]. Pizzas
- Which words tell about the fast speed of the train ? [a]. Rushing on [b]. Here comes train [c]. carrying mail
- When do trains on ? [a]. through down to dusk. [b]. through day and darkness [c]. both a and b

Q - 2. Word meanings.

- Enter - _____
- Surprised - _____
- Value - _____
- Whole - _____
- Plenty - _____

Q - 3. Match the following.

- Rohit [a]. Sand witches
- Ria [b]. potato chips and chocolates
- Sameer [c]. A chocolate cake
- Saumya [d]. balloons and patties
- Gaurav [e]. Juices , glasses and paper plates.

Q - 4. Answer the following.

- Where do trains run ? _____
- What is balanced diet ? _____
- Where do trains carry ? _____

Q - 5. Circle the correct option.

- Where does mister moon live ? [house / sky / sea]
- What does the poet say to mister moon in the end? [Good morning / Good afternoon]
- Where does mister moon follow the poet ? [whenever he goes / whenever he sits / whenever he sleeps]
- Mister moon watches the poet with _____ eyes. [yellow / dull / bright]

Q - 6. Fill in the blanks with the correct form of verbs given in the brackets.

- The animals _____ [eat / eats] together.
- The princess _____ [live / lives] in a palace.
- The clown _____ [make / makes] people laugh.
- The teacher _____ [teaches / teach] well.
- All the students _____ [watch / watches] the cricket match.

**Q - 1. Tick the correct option.**

- | | | | |
|---|----------------------------|----------------------|-------------------|
| 1. Which animal lives on tree ? | [a]. fish | [b]. monkey | [c]. trees |
| 2. Which plant is useful for medicine | [a]. banyan | [b]. neem or tulsi | [c]. peepal |
| 3. Which animals has eight legs ? | [a]. spider | [b]. cockroach | [c]. lizard |
| 4. Water is mostly depend on the | [a]. rain | [b]. dam | [c]. pond |
| 5. What is used to decorate the house during diwali ? | [a]. Rangoli paper lantern | [b]. colours - Gulal | [c]. Curds pots |
| 6. Whose eyes are weak , but sense of smell is very strong. | [a]. A lizard's | [b]. A house fly | [c]. A rat's |
| 7. Which feeling does a child learn from his family. | [a]. Hatred | [b]. Jealousy | [c]. Respect |
| 8. What food can a new born infant have ? | [a]. puri - sabji | [b]. Mother's milk | [c]. Roti - sabji |
| 9. Which item is made from rice ? | [a]. Idli | [b]. Sheera | [c]. Cake |
| 10. Which vehicle is used for air travel. | [a]. Bus | [b]. Train | [c]. Airplane |

Q - 2. Fill in the blanks.**[hospital , camel , monsoon , traffic - police , owe , foot ball]**

- The animals useful for travelling in a desert is _____.
- A nurse's place of duty is a _____.
- A _____ takes care of the coming and going of vehicles at cross roads.
- Seema was selected for the _____ team.
- The _____ goes out at night in search of its food.
- The rainy season is also known as the _____.

Q - 3. Write true and false statements.

- There are special schools for the deaf , mute and the blind.
- We should eat the same type of food every day.
- Boiled food is easy digest.
- A family teaches us respect.
- Water is not useful for us.
- A spider can fly.
- We should always save the tree.
- We must away respect our elders.

Q - 4. Classify the animals. [cow , lion , zebra , dog , tiger , elephant , goat , horse]

Domestic animals = _____

Wild animals = _____

Classify the plants. [peepal , bitter - gourd , mango , tulsi , grapes , rose , neem , periwinkle]

Tree = _____

Bushes = _____

creepers = _____

Classify the name of grains and pluses. [wheat , bajro , jowar , green - gram , peas , (tuar) arhar , assor]

Grains = _____

Pulses = _____

Q - 5. Give two examples.

- Can fly = _____ , _____
- Pulses = _____ , _____
- Insects = _____ , _____
- medicine plants = _____ , _____
- Vehicles name = _____ , _____

**Q - 1. Tick the correct option.**

- In our national flag the saffron colour stands for... [a]. courage [b]. life [c]. peace
- Whose birthday is celebrated as Teacher's day.
[a]. Dr. APJ Abdul Kalam [b]. Dr. Bose [c]. Dr. S. Radha - krishna
- Which festival is celebrated in Nagaland ? [a]. magi purnima [b]. bathukamma [c]. Sekrenyi
- _____ is known as the spice garden of India. [a]. Kerala [b]. Punjab [c]. Bengluru
- In which language was our "National anthem" originally written. [a]. Hindi [b]. Sanskrit [c]. Bengali
- When was " Jana Gana Mana " adopted as our National anthem.
[a]. 26th January 1950 [b]. 24th January 1950 [c]. 15th August 1947
- A stranger offers you a big chocolate what will you do ? [a]. You will accept it happily. [b]. You will refuse it.
- The gateway of India is located in _____ [a]. Mumbai [b]. Delhi [c]. Kolkata
- Range is place for the game of [a]. Boxing [b]. Chess [c]. Shooting
- Which of the following games is played on a court ? [a]. Chess [b]. Basket ball [c]. Boxing
- The _____ is famous structure in Kolkata. [a]. Gateway of India [b]. Hawrah – Bridge [c]. Golden temple
- Which is the coldest place in India ? [a]. Siachen - Glacier [b]. Dras [c]. Barwani
- The highest mountain peak in India is in [a]. Assam [b]. Sikkim [c]. Meghalaya
- It is the hottest planet [a]. Mercury [b]. Venus [c]. Mars
- When is Teacher's Day - celebrated ? [a]. 4th September [b]. 5th August [c]. 5th Septe
- When is children's day celebrated ? [a]. 15th November [b]. 16th November [c]. 14th November
- Whose birthday is celebrated as children's day ?
[a]. Amitabh Bachan [b]. Pt. Jawaharlal Nehru [c]. Dr. S. Radha krishan
- The green colour in our national flag stands for. [a]. Truth [b]. growth [c]. peace
- The white colour in our national flag stands for. [a]. Happiness [b]. courage [c]. peace
- Which of these festival is celebrated in Karnataka ? [a]. Mysore Dasara [b]. Battu kamma [c]. Maghi purnima

Q - 2. Fill in the blanks.

- Our national flag has _____ equal bands of colours. (three / five)
- Follow _____ on the road to prevent accidently. (safety rules / un safety rules)
- our national _____ is a symbol of our country. (flag / bird)
- _____ bring us together and spread happiness. (festival / planning)
- _____ is known as silicon valley of India. (Bangalore , Kolkata)
- _____ is one of the oldest garments of the world. (sari , suit - salwar)
- Eat healthy food to _____ and strong. (stay healthy , unhealthy)
- The more you use your _____ , the sharper it becomes. (brain / hand)
- The game of _____ started at a party in America. (skating / football)
- Don't throw _____ in water bodies. (garbage / water)
- By _____ , we mean being clean in body and mind. (cleanliness , dirty)
- India is known for its _____. (unity in diversity / unity)
- _____ is the only bird that can swim but cannot fly. (penguin / peacock)
- Charles Babbage invented the _____. (computer / television)
- In our National flag , the top band is _____. (saffron / green)
- The _____ is only planet where life exists. (earth / sun)
- Our national anthem was written by _____. (Rabindranath tagore / Valmiki)
- The garden city of India is _____. (Bangalore / Madras)
- The hottest place in India is _____. (Titlagarh / barwani)
- Practice _____ daily and be healthy. (yoga / rest)



પ્રશ્ન:1. નીચેના ખૂટતા સ્વર લખો.

અ _____ ઈ _____ ઉ _____ એ _____ ઓ _____ અં _____

પ્રશ્ન:2. ખૂટતી માત્રાવાળા અક્ષર લખો.

ક _____ કિ _____ કુ _____ કે _____ કો _____ કં _____
ન _____ ની _____ ને _____ નો _____ નં _____

પ્રશ્ન:3. નીચેના શબ્દોમાં ખુતો અક્ષર કૌસમાંથી પસંદ કરીને લખો.

ઉં _____ ર _____ (મ , દ , ક) _____ પ કાર _____ (ચ , ઉ , મ)
જંગ _____ (જ , લ , ર) _____ ક _____ ડા _____ (પ , ય , ધ)
મી _____ ઈ _____ (દા , ઢા , ડા) _____ ગ લો _____ (ટ , ઠ , ઠ)

પ્રશ્ન:4. કૌસમાં આપેલા શબ્દોમાંથી યોગ્ય શબ્દ પસંદ કરી ખાલી જગ્યા પૂરો.

1. ચૂં ચૂં કરતા _____ મામા (ઉદર . ઉદર)
2. બકરીનું બચ્ચું _____ (લવારું , બોકડું)
3. કાગડા _____ ચાંચ તૂટી ગઈ . (ની , નો , ના)
4. કાબર અને કાગડા _____ કામ બાજરો કાપવાનું હતું. (નો , ની , નું)
5. ગણેશે માતા પિતા _____ પૂજા કરી. (ની , નું , ના)
6. કપડા _____ દરમાં પેસી જાય. (કાતળી , કાતરી)

પ્રશ્ન:5. નીચેના શબ્દોને સુંદર અક્ષરે ફરી લખો.

1. પરોઢ = _____
2. મસ્જિદ = _____
3. નીંદર = _____
4. દુનિયા = _____
5. વારંવાર = _____
6. કાર્તિક્ય = _____

પ્રશ્ન:6. નમુના પ્રમાણે શબ્દ જોડી બનાવો.

1. દોડવું = _____
2. ગાવું = _____
3. ખાવું = _____
4. પૂછવું = _____
5. રમવું = _____

પ્રશ્ન:7. નીચેના શબ્દોના જાતિભેદ દર્શાવો.

1. ઉંદર = _____
2. મામા = _____
3. સિંહ = _____
4. રાજા = _____
5. વાંદરો = _____

પ્રશ્ન:8. નીચે આપેલા શબ્દોના સમાનાર્થી શબ્દો લખો.

1. જંગલ = _____
2. સવાર = _____
3. આકાશ = _____
4. સુરજ = _____
5. દુનિયા = _____
6. ઈશ્વર = _____

પ્રશ્ન:9. નીચેના શબ્દોના વિરુદ્ધાર્થી શબ્દો લખો.

1. સુંદર X _____
2. મોટું X _____
3. મુશ્કેલ X _____
4. નિરાશા X _____
5. નજીક X _____
6. સવાર X _____

પ્રશ્ન:10. નીચેના દરેક શબ્દ સમૂહ માટે એક શબ્દ લખો.

1. ખેતરમાંથી નકામું ઘાસ ઉખેડી નાખવું = _____
2. સિંહની આકૃતિવાળું આસન = _____
3. સુર્યાસ્ત પછીનો સાંજનો ઉજાસ = _____
4. મોટી ફાંદવાળા = _____
5. કોઈપણ વસ્તુ કે વ્યક્તિની આસપાસ ફરવું તે = _____
6. પવિત્ર ધર્મસ્થાનની શ્રદ્ધાપૂર્વક યાત્રા કરવી તે = _____

પ્રશ્ન:11. નીચેના વિધાનો ખરા છે કે ખોટા તે લખો.

1. ગણેશે માતા પિતાની પૂજા કરી.
2. ધર્મરાજ પુસ્તકના પાના ફાળે છે.
3. શબનમ માતાને ઘરકામમાં મદદ કરે છે.
4. સિંહ જંગલનો રાજા છે.
5. પંકિત ચંપલ આડા-અવળા મુકે છે.
6. ગણેશજી અને કાર્તિક્ય બંને ભાઈઓ નથી.



प्रश्न:1. दिए गए गद्यांश को पढ़िए तथा पूछे गए प्रश्नों के उत्तर दीजिए।

बापू समय पर सभा स्थल पहुँचने के लिए बेचैन होने लगे। तभी उन्हें एक उपाय सुझा। उन्होंने आश्रम में राखी हुई साईकिल उठाई और उस पर सवार होकर सभा के लिए चल दिए। बापू सभा स्थल पर ठीक पञ्च बजे पहुँच गए। वहाँ पर इन्तजार करते लोगो से मिले। इधर आयोजक मोटरगाड़ी पर सवार होकर आश्रम पहुँचा। लेकिन उसे वहाँ गाँधीजी नहीं मिले। आयोजक उदास होकर सभा में वापस पहुँचा तो उसने वहाँ गाँधीजी को भाषण देते हुए देखा। भाषण समाप्त होने पर आयोजक गाँधीजी के पास पहुँचा और समय पर न पहुँचने के लिए उनसे माफ़ी माँगी। गाँधीजी ने माफ़ी देते हुए आयोजक को समझाया, "समय बहुत कीमती होता है। जो इस कीमती समय का सदुपयोग करता है वह हमेशा आगे बढ़ता है।"

- बापू सभा स्थल पर कितने बजे पहुँचे ? [a]. ठीक पाँच बजे [b]. ठीक चार बजे
- क्या बहुत कीमती होता है ? [a]. समय [b]. व्यक्ति
- गाँधीजी सभा में कैसे पहुँचे ? _____
- गाँधीजी ने आयोजक को क्या समझाया ? _____

प्रश्न:2. विलोम शब्द पर ✓ का निशान लगाइए।

- | | | | | |
|-----------|---|--------|-------|--------|
| 1. खाना | x | जागना | पीना | सोना |
| 2. ताकतवर | x | बलवान | कमजोर | बलशाली |
| 3. कम | x | ज्यादा | महँगा | तगड़ा |
| 4. रात | x | शाम | बड़ा | दिन |

प्रश्न:3. वचन बदलो।

- | | |
|-----------------|------------------|
| 1. शाळा = _____ | 2. बस्ता = _____ |
| 3. माता = _____ | 4. सीढ़ि = _____ |

प्रश्न:4. लिंग बदलो।

- | | | |
|------------------|-------------------|----------------|
| 1. लड़का = _____ | 2. पिता = _____ | 3. शेर = _____ |
| 4. राजा = _____ | 5. बिल्ला = _____ | |

प्रश्न:5.[अ] दिए गए वाक्यों में संज्ञा शब्दों पर गोला करके अलग लिखिए।

- स्नेहा बहुत उदास थी। _____
- उसने एक सुंदर गुडिया पसंद कर ली। _____

[ब] क्रिया शब्द पर गोला लगाइए।

- बच्चे खेल रहे हैं। _____
- रेखा पाठशाला जा रही है। _____
- आकाश पढ़ रहा है। _____

प्रश्न:6. दिए गए शब्दों में "ता" जोड़कर नए शब्द लिखिए।

- | | | |
|----------------------|---------------------|----------------------|
| 1. मधुर + ता = _____ | 2. सरल + ता = _____ | 3. महान + ता = _____ |
|----------------------|---------------------|----------------------|


प्रश्न:7. दिए गए प्रश्नों के उत्तर में ✓ का निशान लगाइए।

- | | | |
|--|---------------------|----------------------|
| 1. निखिल ने खिलौनेवाले से क्या लिया ? | [a]. चाबी वाला भालू | [b]. नाचने वाला बंदर |
| 2. वल्लभ आगे चलकर किस नाम से मशहूर हुआ ? | [a]. चाचा नेहरु | [b]. लौह पुरुष |
| 3. स्वर के छोटे भाई का क्या नाम था ? | [a]. स्वामी | [b]. अय्यर |
| 4. मुझे खाओगे तो मैं तुम्हें ताकतवर बना दूंगा, किसने कहा ? | [a]. गाजर ने | [b]. पलक ने |
| 5. दिन किस पर चढ़ता है ? | [a]. आसमान पर | [b]. पहाड़ पर |


प्रश्न:8. खाली जगह भरों। [हुकम, अंदर, समझदार, ड्रम, के]

- सियार नील रंग से भरे _____ में कूद गया।
- नेहा, तुम तो बहुत _____ हो गई हो।
- सभी जानवर सियार के _____ का पालन करने लगे।
- ये कीटाणु हमारे शरीर के _____ सम जाएँगे।
- कुत्ते सियार _____ पीछे पड़ गए।


Q - 1. multiple choice questions.

- place value of 5 in 1345 [a]. 50 [b]. 500 [c]. 5 [d]. 5000
- If 499 is rounded off to nearest hundred it becomes [a]. 600 [b]. 500 [c]. 400 [d]. 300
- $240 + 790$ is the same as [a]. $630 + 300$ [b]. $850 + 280$ [c]. $400 + 630$ [d]. $150 + 250$
- $250 + 300 + 400$ is equal to [a]. 900 [b]. 60 [c]. 100 [d]. 200
- If we subtract 136 from 242 we get [a]. 106 [b]. 619 [c]. 185 [d]. 189
- Which of the following correct ?
 [a]. $\begin{array}{r} \text{H} \quad \text{T} \quad \text{O} \\ 4 \quad 5 \quad 6 \\ - 2 \quad 3 \quad 8 \\ \hline 2 \quad 2 \quad 8 \end{array}$ [b]. $\begin{array}{r} \text{H} \quad \text{T} \quad \text{O} \\ 3 \quad 2 \quad 6 \\ - 2 \quad 9 \quad 7 \\ \hline 2 \quad 9 \quad 7 \end{array}$ [c]. $\begin{array}{r} \text{H} \quad \text{T} \quad \text{O} \\ 4 \quad 2 \quad 5 \\ - 1 \quad 6 \quad 8 \\ \hline 2 \quad 6 \quad 7 \end{array}$
- $22 \times 0 =$ [a]. 0 [b]. 22 [c]. 20 [d]. 30
- There are 9 packets of 23 candles each The total number of candles is [a]. 207 [b]. 32 [c]. 217 [d]. 46
- Which one of the following is incorrect ? [a]. $16 \div 1 = 16$ [b]. $16 \div 16 = 1$ [c]. $0 \div 16 = 16$
- The fraction of shaded part is  [a]. $1/2$ [b]. $1/4$ [c]. $1/3$ [d]. $3/4$

Q - 2. fill in the blanks.

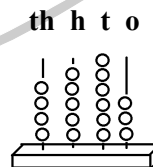
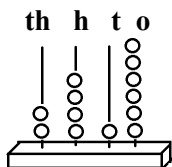
- Face value of 2 in 1752 is _____
- Predecessor of 1078 is _____
- $89 + 10 =$ _____ + 89
- Sum of 999 and 1 is _____
- $669 - 32 =$ _____
- $5265 -$ _____ = 5265
- $5 \times 5 =$ _____
- $63 \div$ _____ = 63
- $1/3$ of 6 = _____
- The fraction of un shaded region is = _____ 

Q - 3. write the number names.

- 2385 = _____
- 5027 = _____

Q - 4. write in expanded forms.

- 2554 = _____
- 5027 = _____

Q - 5. write the number represented on the abacus.

Q - 6. Encircle the smallest number in each row.

- 1286 4862 3368 2394 5252
- 7910 7901 7923 7940 7911

Q - 7. write the successors

- 3843 = _____
- 7942 = _____
- 5102 = _____
- 6838 = _____

Q - 8. From the largest and smallest number using the given digits.

Digits

Largest number

Smallest number

- 4, 6, 0, 3 _____ _____
- 5, 8, 7, 1 _____ _____



Q - 9. fill in the table.

fraction

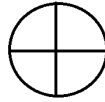
Numerator

Denominator

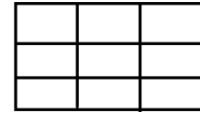
$\frac{1}{2}$
 $\frac{4}{8}$

Q - 10. shade $\frac{3}{4}$ in the following shapes.

Q - 8. colour the fractions of collections as mentioned.



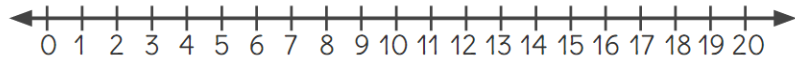
$\frac{1}{3}$ of 6 = _____



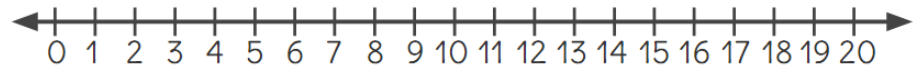
$\frac{1}{3}$ of 9 = _____

Q - 11. show the numbers on number line given below.


(a) $12 \div 4 =$ _____



(b) $3 \times 5 =$ _____



Q - 12. There are 490 chairs in a school auditorium 10 chairs are arranged in a row. ?How many rows are there in the auditorium.



**Q - 1. Tick the correct option.**

- An animal that lives with us is _____. [a]. cat [b]. lion [c]. tiger
- A _____ eats both plants and flesh of other animals. [a]. bear [b]. sheep [c]. tiger
- We should walk on the _____. [a]. road [b]. footpath [c]. road divider
- A child may get injured in the playground because of a _____ game. [a]. rough [b]. correct [c]. old
- We wear woolen clothes to keep our bodies _____. [a]. warm [b]. cool [c]. healthy
- I saw a house made of canvas. It was a _____. [a]. stilt house [b]. igloo [c]. tent
- Which is the heaviest part of the soil ? [a]. clay [b]. gravel [c]. humus
- Soil contains _____. [a]. grain [b]. pluses [c]. water
- Which of the following can make its own food ? [a]. leopard [b]. plant [c]. tiger
- Which one a living thing ? [a]. book [b]. table [c]. human









Q - 2. Fill in the blanks.

- Cow is a _____ eating animal. (flesh / plant)
- A _____ sucks blood. (mosquito / fly)
- Sheep gives us _____. (silk / wool)
- We should not play with _____. (matchsticks / ball)
- We should not run on the _____. (stairs / playground)
- We must not _____ anybody , even in fun. (help / push)
- Most of the towns have _____ houses. (kachcha / pakka)
- A pakka house is _____. (very strong / not strong)
- We must keep our house _____. (dirty / clean)
- Soil contains _____. (clay / light)
- _____ is formed by the breakdown of rocks. (humus / soil)
- It takes _____ years to form soil. (many / few)
- Birds have _____ to fly. (wings / legs)
- We use _____ to breathe. (lungs / gills)
- A tap root has _____ main root(s). (many / one)

Q - 3. Match the following.

- | | |
|--------------------|-----------------------------|
| 1. Flies | [a]. let sunlight in |
| 2. Windows | [b]. takes dirty water away |
| 3. Fur clothes | [c]. Spread disease |
| 4. Drainage system | [d]. keep us warm |
| 5. Plants | [e]. fishes |
| 6. Gills | [f]. birds |
| 7. Wings | [g]. Cockroaches |
| 8. Antennae | [h]. seeds |
| 9. Cabbage | [i]. seeds |
| 10. Wheat | [j]. leaves |

Q - 4. Match the sources with natural fibers.

- | | | |
|-----------|--|--|
| 1. Silk | Cotton plant  |  silk sari |
| 2. jute | silkworms  |  Jute bag |
| 3. Cotton | sheep  |  cotton shirt |
| 4. Wool | Jute plant  |  Muffler |